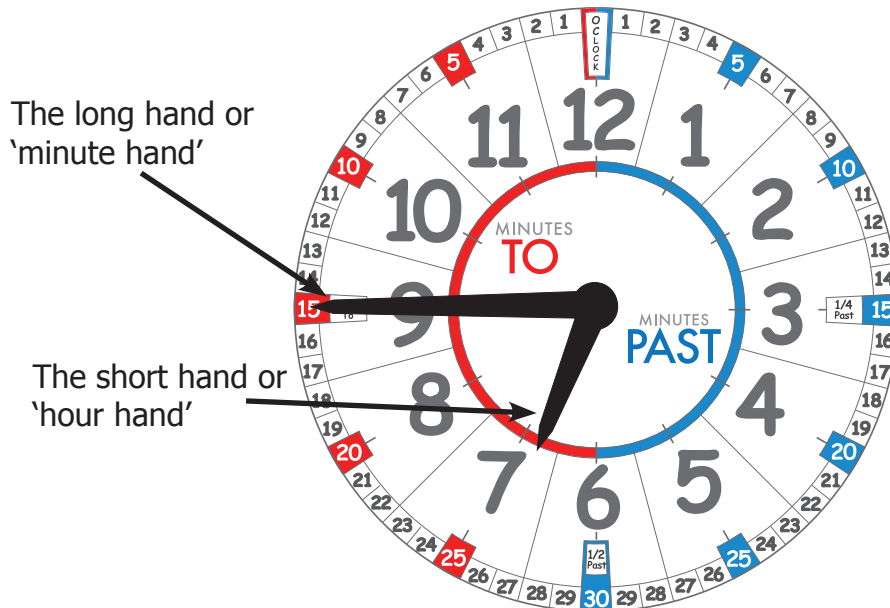


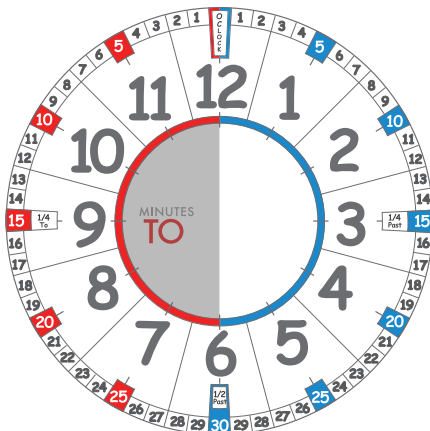
Lesson Aim:

'minutes to' and 'minutes past' – the EasyRead Time Teacher Clock face

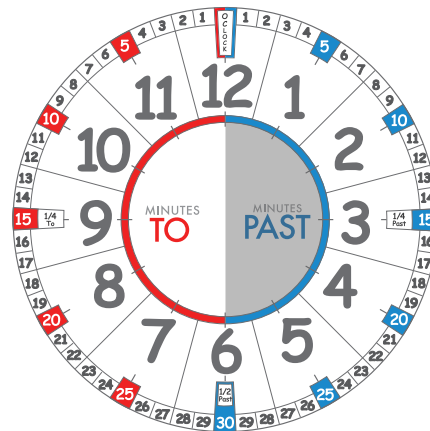
Did you know that every clock has two hands: a minute hand which is the long hand; and an hour hand which is the shorter hand?



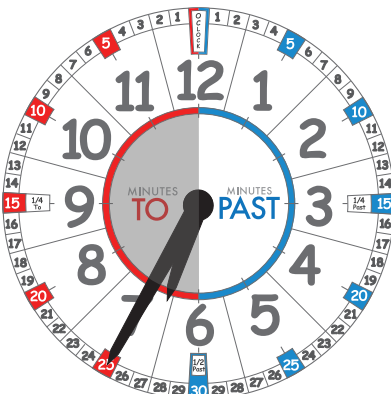
Our clocks are special so we split the face into two halves; the left hand side is the red side and is called 'minutes to'; the right hand side is the blue side and is called the 'minutes past'



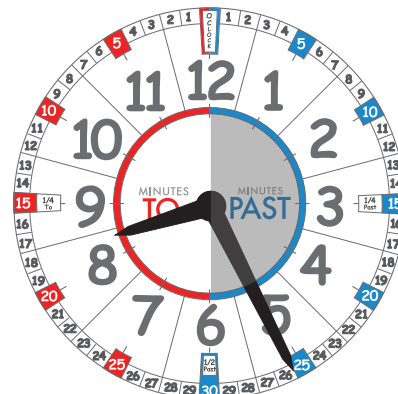
If the long hand is on the red side then it is 'minutes to'



If the long hand is on the blue side then it is 'minutes past'



So which side is the long hand on?
Is it on the 'minutes to' or 'minutes past'?



So which side is the long hand on?
Is it on the 'minutes to' or 'minutes past'?